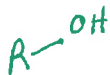


Name: Key

Quiz 1

Draw each of the following functional groups:

1. Alcohol



2. Alkane



3. Alkene



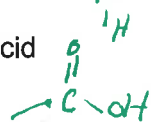
4. Amine



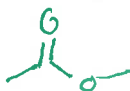
5. Amide



6. Carboxylic acid



7. Ester



8. Ether



9. Aldehyde



10. Ketone



What interests you in the area of human nutrition and metabolism?

I love understanding how many body functions at the chemical level.

In the last 24 hours, have you eaten a well-balanced diet?

Yes

In the last 24 hours, have you done at least 30 minutes of an activity that increased your heart rate above its normal resting mode?

Yes

In the last 24 hours, have you smoked anything?

Nope